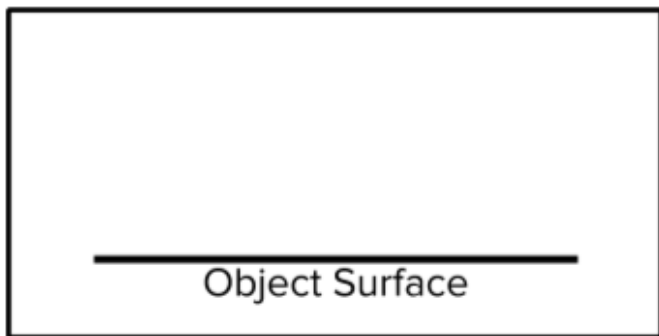


Lab Group # _____

Observation Data Sheet

Object: _____

1. **Sketch** the water drop's profile view.



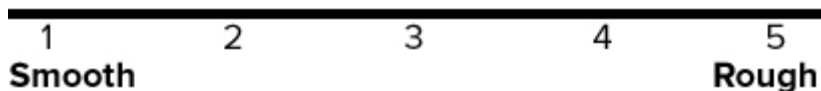
2. **Tilt Test**

The water drop slides when the surface is tilted at a _____ degree angle.

The water drop is absorbed and/or does not slide.

3. **Rate Surface Texture**

Draw a large dot on the line to show where the object's texture falls on your scale.

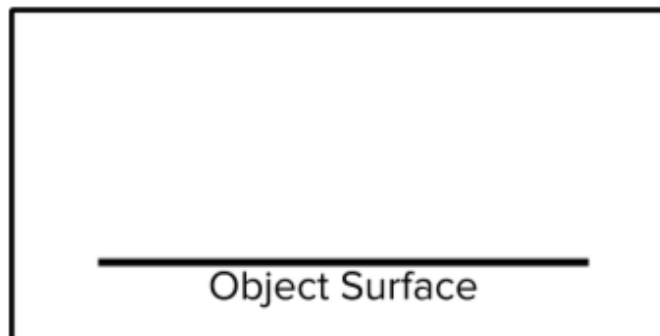


Lab Group # _____

Observation Data Sheet

Object: _____

1. **Sketch** the water drop's profile view.



2. **Tilt Test**

The water drop slides when the surface is tilted at a _____ degree angle.

The water drop is absorbed and/or does not slide.

3. **Rate Surface Texture**

Draw a large dot on the line showing where the object's texture falls on your scale.

